


2021 WORKSHEET 7

NUMERACY YEAR 1


Answer all the questions in the Mathematics Activity book.

Draw the number of objects in the Set according to the given numbers and complete the number sentence.

a.



+




=

+


=

(2 marks)

b.



+




=

+


=

(2 marks)

c.



+



=

+

=

(2 marks)